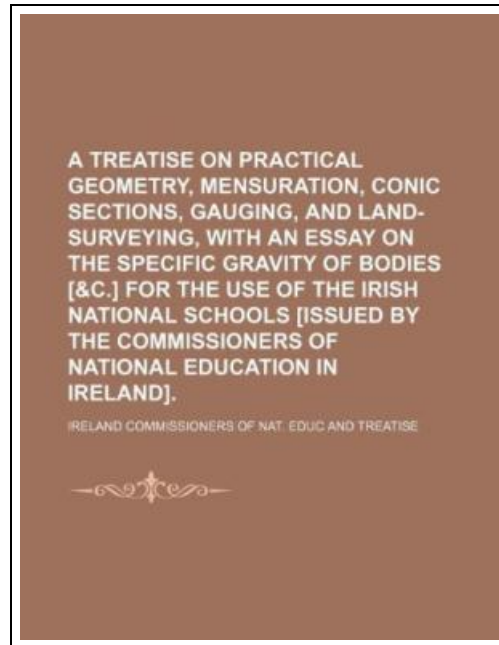


A Treatise on Practical Geometry, Mensuration, Conic Sections, Gauging, and Land-Surveying, with an Essay on the Specific Gravity of Bodies [C.] for the Use of the Irish National Schools [Issued by the Commissioners



Filesize: 9.28 MB

Reviews

I actually started looking at this pdf. it was writtern extremely properly and valuable. I am very happy to inform you that this is basically the greatest book i have read through during my very own daily life and might be he finest pdf for actually.
(Jacey Krajcik DVM)



A TREATISE ON PRACTICAL GEOMETRY, MENSURATION, CONIC SECTIONS, GAUGING, AND LAND-SURVEYING, WITH AN ESSAY ON THE SPECIFIC GRAVITY OF BODIES [C.] FOR THE USE OF THE IRISH NATIONAL SCHOOLS [ISSUED BY THE COMMISSIONERS

DOWNLOAD



To save **A Treatise on Practical Geometry, Mensuration, Conic Sections, Gauging, and Land-Surveying, with an Essay on the Specific Gravity of Bodies [C.] for the Use of the Irish National Schools [Issued by the Commissioners** PDF, remember to click the hyperlink beneath and download the file or have accessibility to additional information that are relevant to **A TREATISE ON PRACTICAL GEOMETRY, MENSURATION, CONIC SECTIONS, GAUGING, AND LAND-SURVEYING, WITH AN ESSAY ON THE SPECIFIC GRAVITY OF BODIES [C.] FOR THE USE OF THE IRISH NATIONAL SCHOOLS [ISSUED BY THE COMMISSIONERS** book.

Rarebooksclub.com, United States, 2012. Paperback. Book Condition: New. 246 x 189 mm. Language: English . Brand New Book ***** Print on Demand *****.This historic book may have numerous typos and missing text. Purchasers can download a free scanned copy of the original book (without typos) from the publisher. Not indexed. Not illustrated. 1834 Excerpt: .F 32, the least, or diameter at either end C D 24, and the diameter G K 30-157568? Here $322 + (2 \times 30 - 157568)2 + 242 = 523789$ sum; Then $523789 \times 40 = 209515-6$, and $209515-6 \times 1309 = 27424$, the answer. 2. What is the content of the segment of any spindle, the length being 20, the greatest diameter 10, the least diameter at either end 5, and the diameter in the middle between these 8? Ant. 997-458. PROBLEM XXVIII. To find the solidity of a circular ring. Rule. To the thickness of the ring add the inner diameter; multiply the sum by the square of the thickness, and the product by 2-4674, for the solidity.-j This rule is the same as the last, and is demonstrated in Problem XI. Section IV. t Demonstration. Let monv be a cylindrical ring, the diameter 1. The thickness of a cylindrical ring is 2 inches, and the diameter CD5 inches; required its solidity? $(2+5) \times 4 = 28$; then $28 \times 2-4674 = 69-0872$ cubic inches, the A answer. 2. Required the solidity of an iron ring whose axis forms the circumference of a circle; the diameter of a section of the ring 2 inches, and the inner diameter, from side to side, 18 inches? Ans. 197-3925 cubic inches. 3. The thickness of a cylindrical ring is 7 inches, and the inner diameter 20 inches, required its solidity? Ans. 3264-3702. 4. What is the solidity of a circular ring, whose...

-  [Read A Treatise on Practical Geometry, Mensuration, Conic Sections, Gauging, and Land-Surveying, with an Essay on the Specific Gravity of Bodies \[C.\] for the Use of the Irish National Schools \[Issued by the Commissioners Online](#)
-  [Download PDF A Treatise on Practical Geometry, Mensuration, Conic Sections, Gauging, and Land-Surveying, with an Essay on the Specific Gravity of Bodies \[C.\] for the Use of the Irish National Schools \[Issued by the Commissioners](#)

See Also



[PDF] Read Write Inc. Phonics: Yellow Set 5 Storybook 4 the Gingerbread Man

Click the link below to read "Read Write Inc. Phonics: Yellow Set 5 Storybook 4 the Gingerbread Man" document.

[Save PDF »](#)



[PDF] A Treatise on Parents and Children

Click the link below to read "A Treatise on Parents and Children" document.

[Save PDF »](#)



[PDF] Read Write Inc. Phonics: Purple Set 2 Non-Fiction 4 What is it?

Click the link below to read "Read Write Inc. Phonics: Purple Set 2 Non-Fiction 4 What is it?" document.

[Save PDF »](#)



[PDF] TJ new concept of the Preschool Quality Education Engineering: new happy learning young children (3-5 years old) daily learning book Intermediate (2)(Chinese Edition)

Click the link below to read "TJ new concept of the Preschool Quality Education Engineering: new happy learning young children (3-5 years old) daily learning book Intermediate (2)(Chinese Edition)" document.

[Save PDF »](#)



[PDF] TJ new concept of the Preschool Quality Education Engineering the daily learning book of: new happy learning young children (2-4 years old) in small classes (3)(Chinese Edition)

Click the link below to read "TJ new concept of the Preschool Quality Education Engineering the daily learning book of: new happy learning young children (2-4 years old) in small classes (3)(Chinese Edition)" document.

[Save PDF »](#)



[PDF] Harts Desire Book 2.5 La Fleur de Love

Click the link below to read "Harts Desire Book 2.5 La Fleur de Love" document.

[Save PDF »](#)